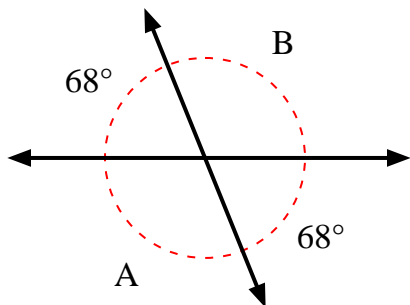


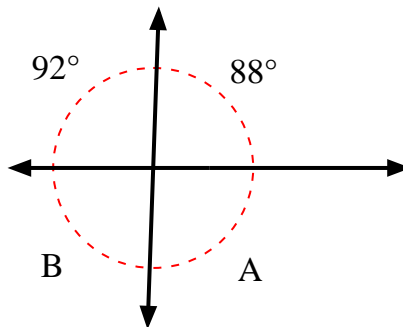


Find the value of angle 'A' and angle 'B'.

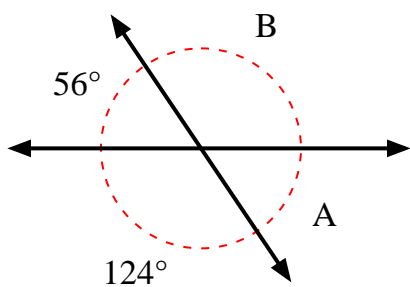
1)



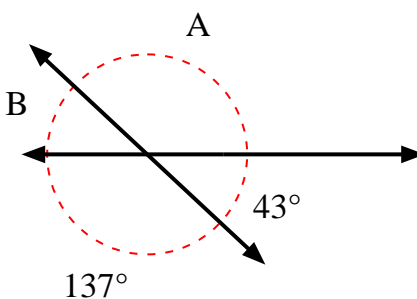
2)



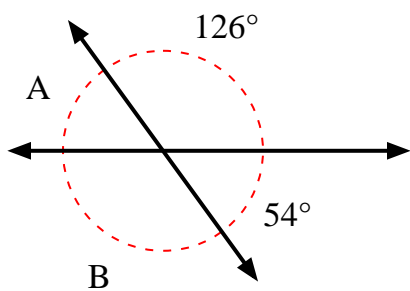
3)



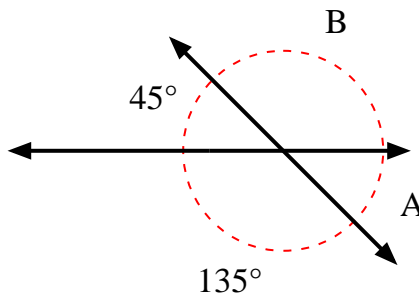
4)



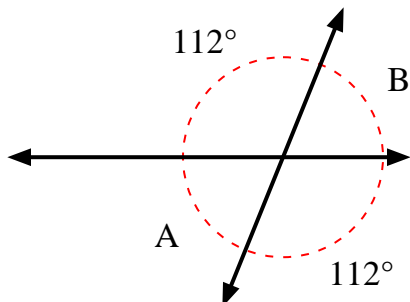
5)



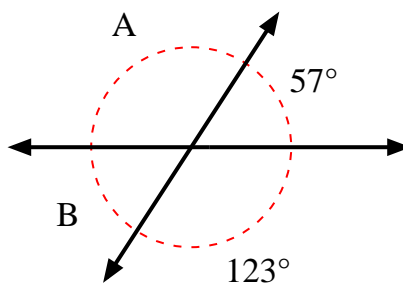
6)



7)



8)



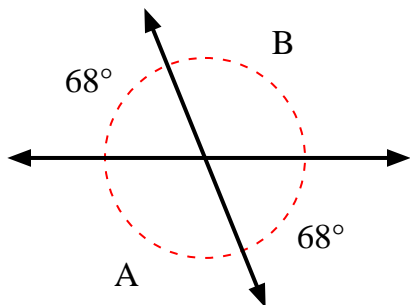
Answers

1. \_\_\_\_\_
2. \_\_\_\_\_
3. \_\_\_\_\_
4. \_\_\_\_\_
5. \_\_\_\_\_
6. \_\_\_\_\_
7. \_\_\_\_\_
8. \_\_\_\_\_

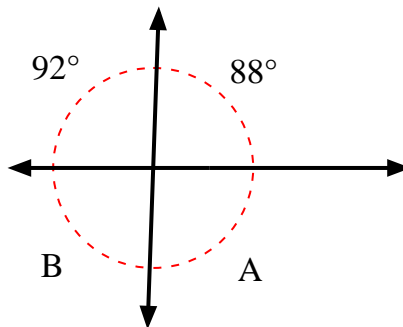


Find the value of angle 'A' and angle 'B'.

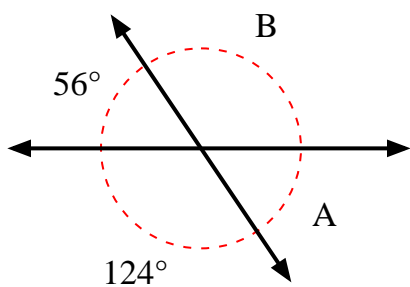
1)



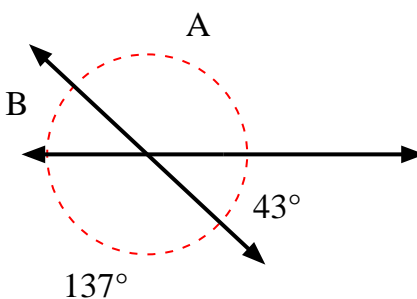
2)



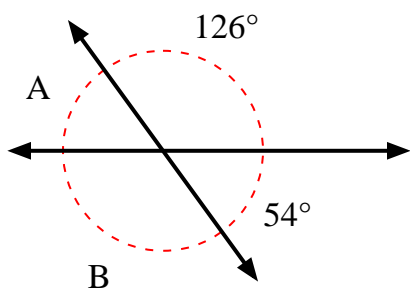
3)



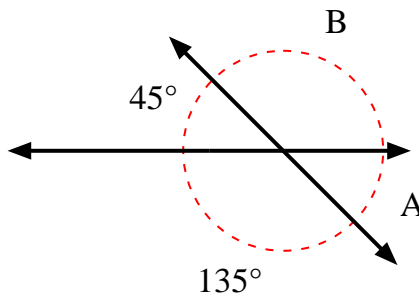
4)



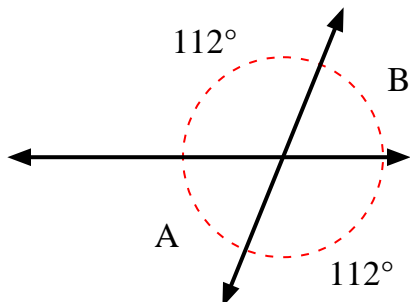
5)



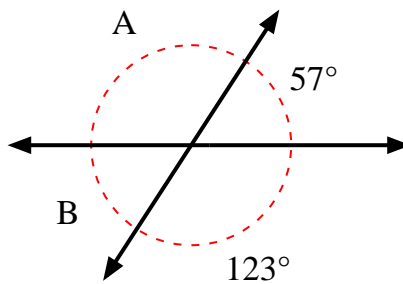
6)



7)



8)



Answers

1.	<u>112°</u>	<u>112°</u>
2.	<u>92°</u>	<u>88°</u>
3.	<u>56°</u>	<u>124°</u>
4.	<u>137°</u>	<u>43°</u>
5.	<u>54°</u>	<u>126°</u>
6.	<u>45°</u>	<u>135°</u>
7.	<u>68°</u>	<u>68°</u>
8.	<u>123°</u>	<u>57°</u>